





NAME _____ DATE _____

COUNTING

Count on to add and fill the sentence.





1)



$$\square + \square = \square$$

There are ___ strawberries altogether.



2)



$$\square + \square = \square$$

There are ___ rabbits altogether.

3)



$$\square + \square = \square$$

There are ___ fishes altogether.